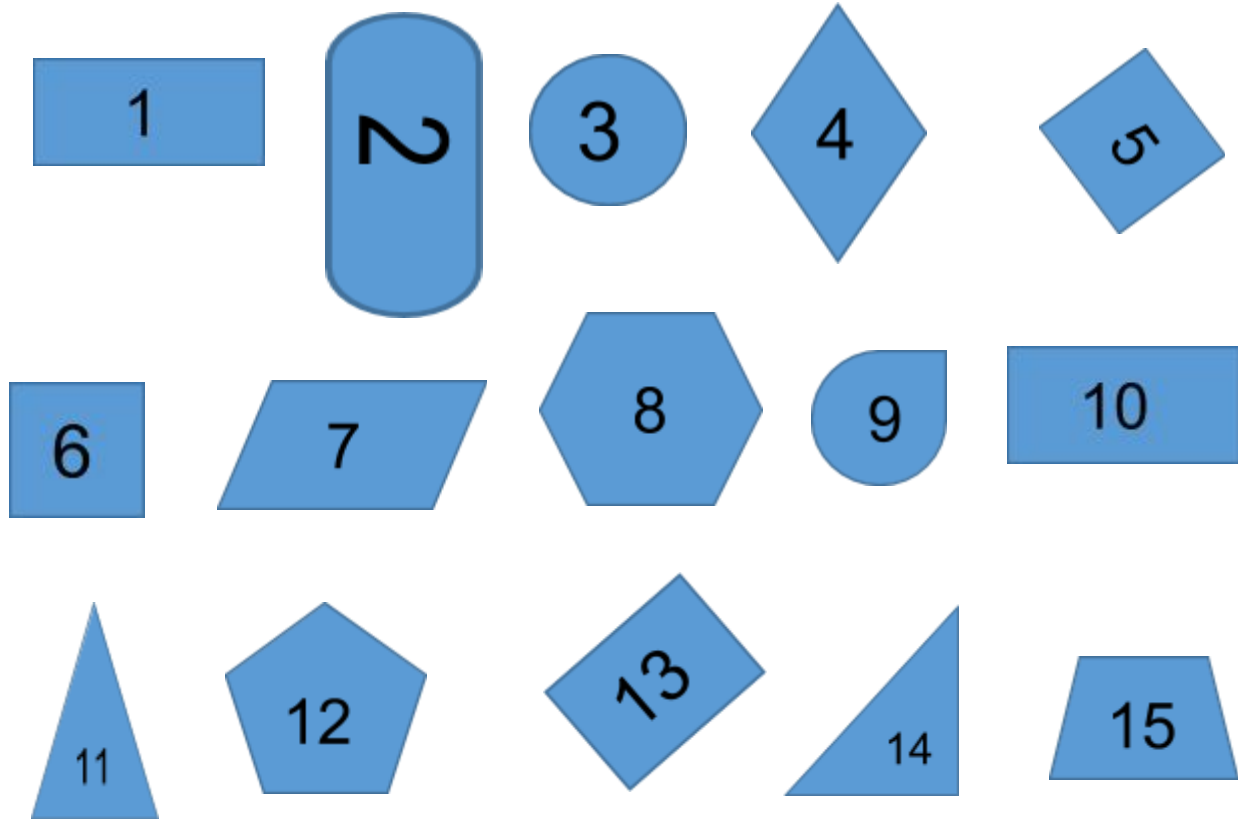


Assessment 2

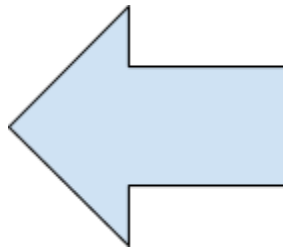
Q 1. Arrange the given shapes in appropriate column in the table, based on whether they have the property given or not. If you are not sure about some shapes, put them in the 'Not sure' column. The first one has been done for you.



Property	Have the property	Don't have the property	Not sure
At least one curved side	2, 9	1, 4, 5, 6, 7, 8, 10, 11, 12, 13, 14, 15	3
All sides equal			
At least one right angle			
More than 2			

obtuse angles			
Opposite sides equal			
Exactly 2 pairs of parallel sides			

Q 2. Write 3 properties that the following shape has.

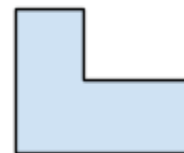



i. _____

ii. _____

iii. _____

Q 3. Choose the property that two of the following shapes have, and two don't.



- A. exactly 3 sides
- B. at least 1 right angle
- C. all angles equal
- D. at least one pair of parallel lines